
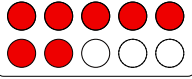

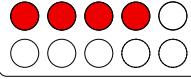

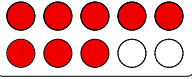

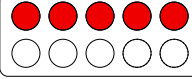

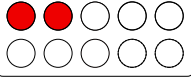

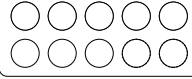



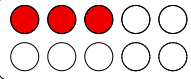

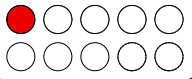

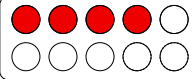



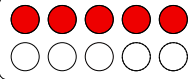

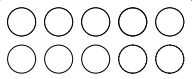

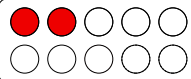



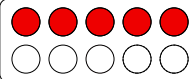



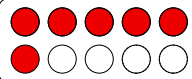

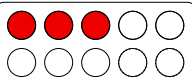

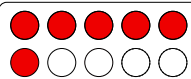

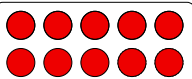

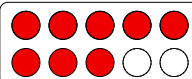

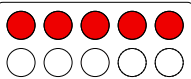

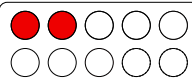



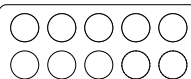

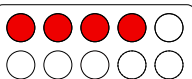

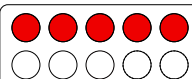

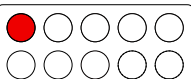

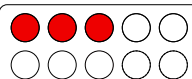

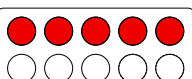

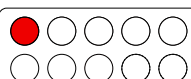



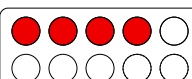



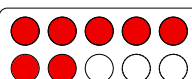


Op Een Rij

1e leerjaar: Hoeveel rode schijfjes zijn er?

Dit spel is een vier op een rij. Je hebt nog schijfjes in 2 kleuren en een dobbelsteen nodig. De speler die aan de beurt is gooit met de dobbelsteen. Vervolgens kiest hij een vakje met het hetzelfde aantal ogen (zie rechts boven) als hij gegooid heeft en lost de opgave op. Bij een juist antwoord mag hij een schijfje leggen op het vakje. Dan is het de beurt aan de andere speler. Wie eerst 4 op een rij heeft (horizontaal verticaal of schuin), heeft gewonnen.

